

MATCH THE CLOCKS WITH THE CORRECT TIME - EXERCISE NO.3

WHAT TIME IS IT?




It's five past eleven.




It's twelve o'clock.




It's quarter past six.



It's half past eight.



It's quarter to two.



It's twenty five past three.



**COOL
COLORING
PAGES**

www.cool-coloring-pages.com